

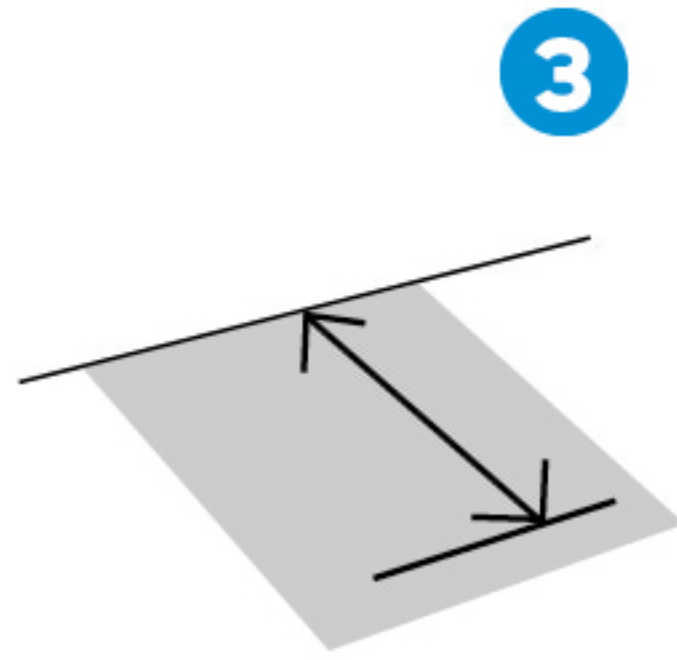
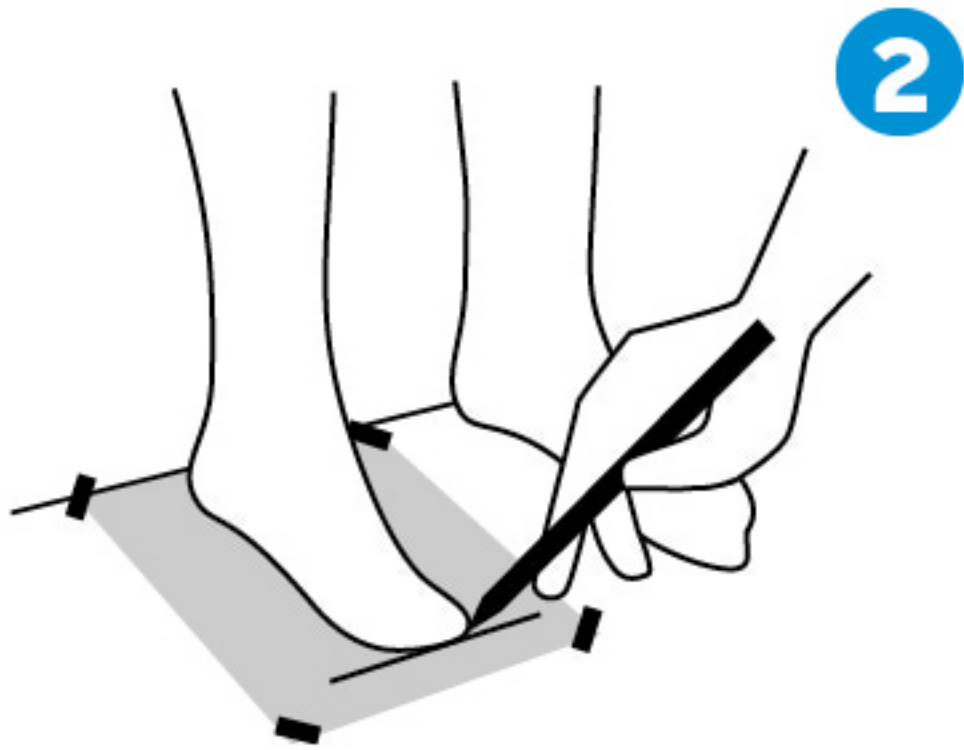
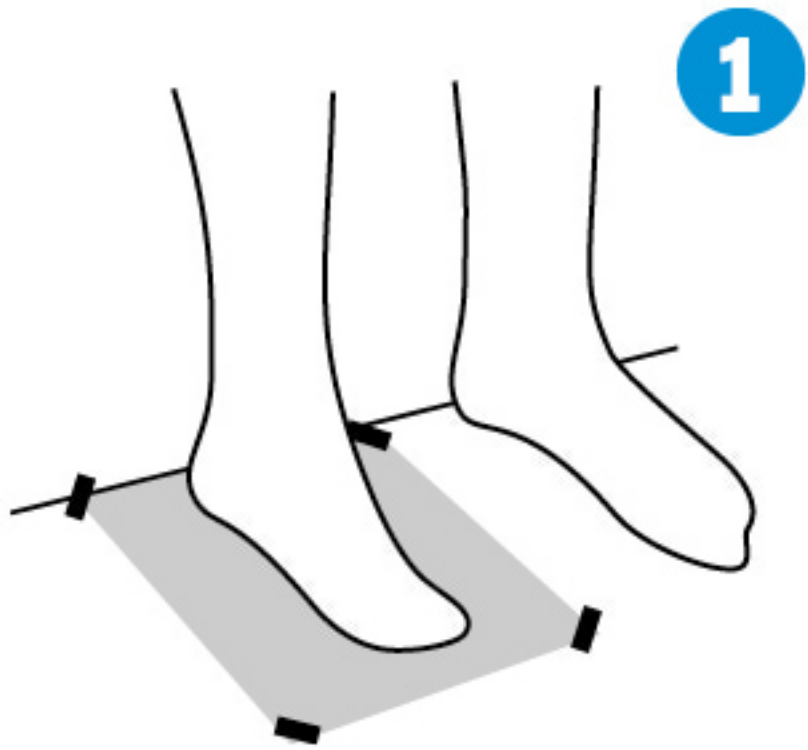
# SIZE GUIDE



## MEN'S

UK SIZE	6	6.5	7	7.5	8	8.5	9	9.5
FOOT LENGTH (CM)	24.3-24.7	24.7-25.1	25.1-25.6	25.6-26	26-26.4	26.4-26.9	26.9-27.3	27.3-27.7
FOOT LENGTH (INCHES)	9.6-9.7	9.7-9.9	9.9-10.1	10.1-10.2	10.2-10.4	10.4-10.6	10.6-10.7	10.7-10.9

UK SIZE	10	10.5	11	12	13	14	15	16
FOOT LENGTH (CM)	27.7-28.1	28.1-28.5	28.5-29	29-29.8	29.8-30.7	30.7-31.5	31.5-32.4	32.4-33.2
FOOT LENGTH (INCHES)	10.9-11.1	11.1-11.2	11.2-11.4	11.4-11.7	11.7-12.1	12.1-12.4	12.4-12.8	12.8-13.2



1

Stand up straight on a piece of paper taped to the floor with your heel against the wall. It's best wearing socks you would use for that pair of shoes !

2

Have someone mark the longest part of your toes on the paper with a pen. Do this for both feet.

3

Measure the distance from the end of the paper to the mark for each foot (in cm or inches) and take the longest one. Then use the chart to find your size.